



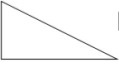






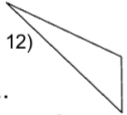

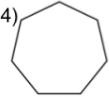

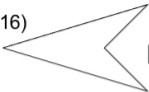
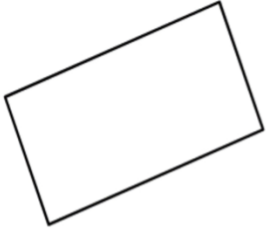
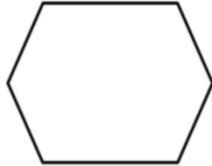
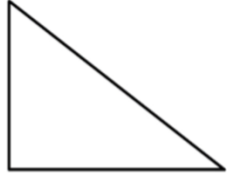


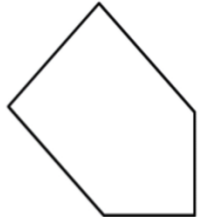


Naming Polygons

Use the words at the bottom of the page to name these polygons.

1)  Name.....	2)  Name.....
3)  Name.....	4)  Name.....
5)  Name.....	6)  Name.....
7)  Name.....	8)  Name.....
9)  Name.....	10)  Name.....
11)  Name.....	12)  Name.....
13)  Name.....	14)  Name.....
 Name.....	16)  Name.....

- Isosceles Triangle Pentagon Octagon Square
 Arrow Head Heptagon Parallelogram
 Equilateral Triangle Nonagon Kite Hexagon
 Trapezium Rhombus Rectangle
 Scalene Triangle Right Angle Triangle

		
Sides: Right angles: Name of shape	Sides: Right angles: Name of shape	Sides: Right angles: Name of shape
		
Sides: Right angles: Name of shape	Sides: Right angles: Name of shape	Sides: Right angles: Name of shape
Pentagon	Parallelogram	Right triangle
Isosceles Triangle	Hexagon	Rectangle