

Monday 16th November

English

Write a sentence for each picture – you can use the words in the word bank or think of your own

Write a sentence to go with each picture.

forest pirate alien birthday candle





Phonics – oo

Read the green and alien words, can you find special friend oo?



good

cook

foot

wook



zood



noom



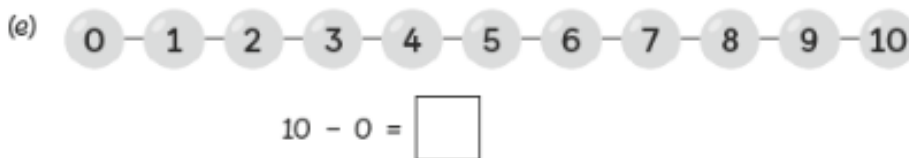
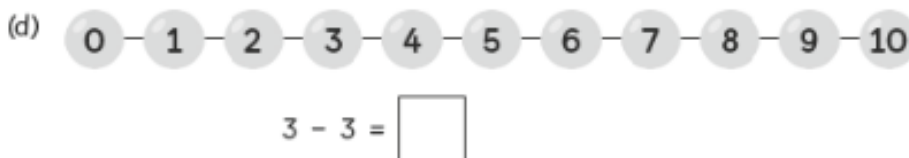
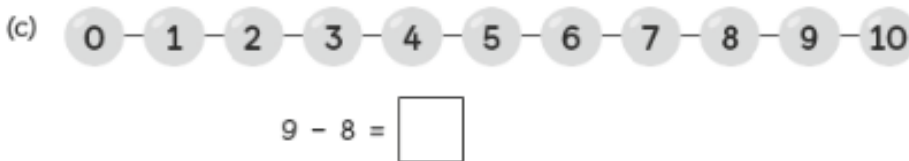
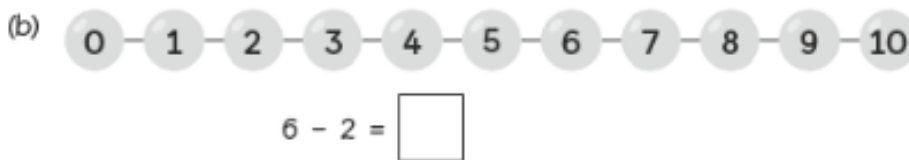
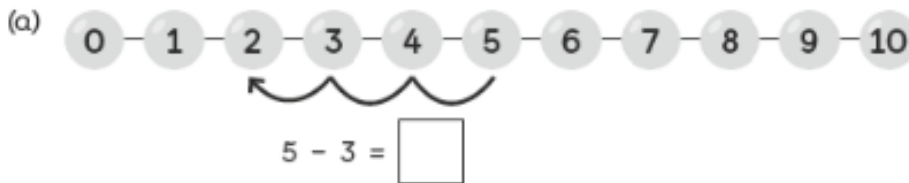
Maths

When you subtract, the total becomes smaller

Subtracting by counting back – use the number lines to help you (if children are struggling, objects could be used to help them)

Subtract by Counting Back

1 Subtract by counting back



Journal Challenge

How many ways can you complete this number sentence?
Use the number line to help you



$\square - \square = 5$

Afternoon lesson – Science

Look at the different weather symbols and record a weather chart for this week. Does the weather change from the morning to the afternoon?

This Week's Weather

Monday
Morning

Tuesday
Morning

Wednesday
Morning

Thursday
Morning

Friday
Morning

Afternoon

Afternoon

Afternoon

Afternoon

Afternoon




Tuesday 17th November

English – make yourself a jam sandwich. Then write a set of instructions using the pictures to help you.

How to Make a Jam Sandwich

Complete the instructions for how to make a jam sandwich.



1. _____

2. _____

3. _____

4. _____

5. _____

6. _____

First

Next

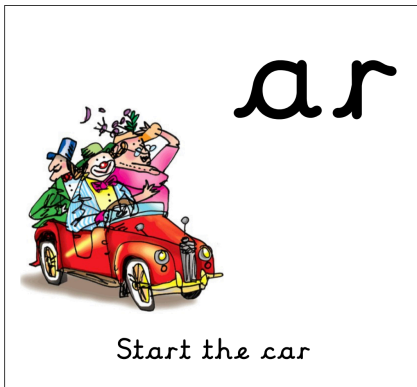
After that

Then

Finally

Phonics – ar

Read the green and alien words, can you find special friend ar?



sharp

farm

bark

garx



quarsh



warl



ar ar ar ar ar ar

Maths

When you subtract, the total becomes smaller

Subtraction number stories



There were 7 rabbits but the black rabbit bounced away!

Complete the subtraction equation.

$$7 - 1 = \square$$



At first, there were 10 carrots in the ground



Then, the rabbits pulled 7 carrots out to eat them!

Write the subtraction equation.

$$\square - \square = \square$$

Write/draw your own subtraction story.

PE

Have a go at the different activities below. How many can you do in one minute?

Jogging

Jog from one point to another and try your best to keep the same pace.



How many times did you jog between the points?

Plank

Hold your body in the plank position for as long as you can. Take a rest when you need to. You can put your knees on the floor to make the move easier.



Could you hold it for one minute?

Leg Raises

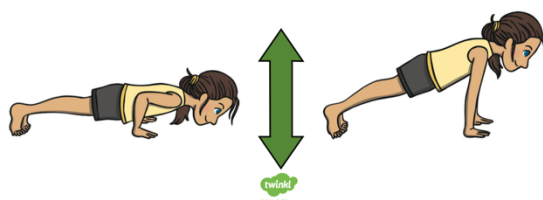
Lie on your back and slowly raise one leg. Lower your leg slowly back down to the floor. Repeat with the other leg.



How many did you do?

Press-Ups

You can put your knees on the floor to make the move easier.



How many did you do?

Burpees

Try to maintain the same pace completing burpees. Try to keep your toes pointed and your legs straight.

What is a burpee?

Standing with your feet at shoulder width apart, bend from the knees and place both palms on the floor. Place your right foot back and then your left foot so that you are in a plank position. Bring your right leg and then left leg back into squat position and jump. Repeat.



How many did you do?

High Knees

Raise each knee in front of you, one at a time, as high as you can. To make this more challenging, try to do this quicker.



How many did you do?

Wednesday 18th November

English

Answer the question – use your imagination!

What made this dog turn green?



Phonics – or

Read the green and alien words, can you find special friend ar



cork

short

born

zorm



chorb



quort



Maths

When you subtract, the greatest number always goes first.

Solving picture problems (subtraction)



3 chicks have eaten. How many chicks are still eating?

$$\square - \square = \square$$



How many of the children are girls?

$$\square \bigcirc \square = \square$$



2 firemen climb down from the fire engine.
How many firemen are left on the fire engine?

$$\square \bigcirc \square = \square$$